

Answer key as per the Question Paper uploaded on Website

Q. NO.	RES
1	4
2	1
3	4
4	3
5	3
6	2
7	3
8	1
9	2
10	2
11	3
12	1
13	2
14	1
15	2
16	4
17	3
18	1
19	2
20	1
21	2
22	2
23	1
24	2
25	1
26	1
27	1
28	4
29	4
30	4
31	3
32	4
33	3
34	3
35	4
36	3
37	3
38	3
39	1
40	1
41	3
42	3
43	3
44	3
45	4
46	2
47	3
48	3
49	3
50	2
51	4
52	3
53	4
54	4
55	2
56	3
57	2
58	4
59	1
60	3
61	1
62	4
63	2
64	1
65	4
66	3
67	4
68	3
69	1
70	1
71	1
72	2
73	1
74	4
75	4

Q. NO.	RES
76	3
77	3
78	3
79	1
80	3
81	3
82	4
83	3
84	1
85	3
86	3
87	1
88	1
89	3
90	3
91	2
92	3
93	3
94	3
95	2
96	3
97	3
98	4
99	1
100	3
101	2
102	2
103	2
104	3
105	3
106	*
107	1
108	4
109	2
110	1
111	2
112	3
113	2
114	1
115	2
116	2
117	3
118	1
119	1
120	4
121	2
122	3
123	2
124	1
125	2
126	2
127	3
128	3
129	4
130	1
131	3
132	2
133	2
134	4
135	3
136	2
137	1
138	4
139	4
140	1
141	4
142	1
143	4
144	4
145	1
146	2
147	3
148	4
149	2
150	2

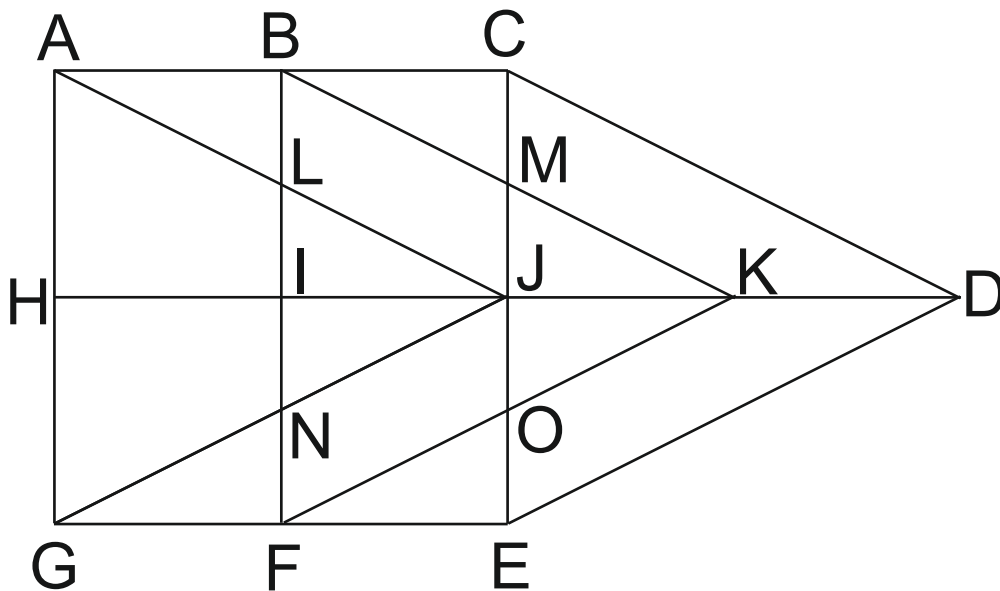
\* Means deleted - Reason for deletion enclosed

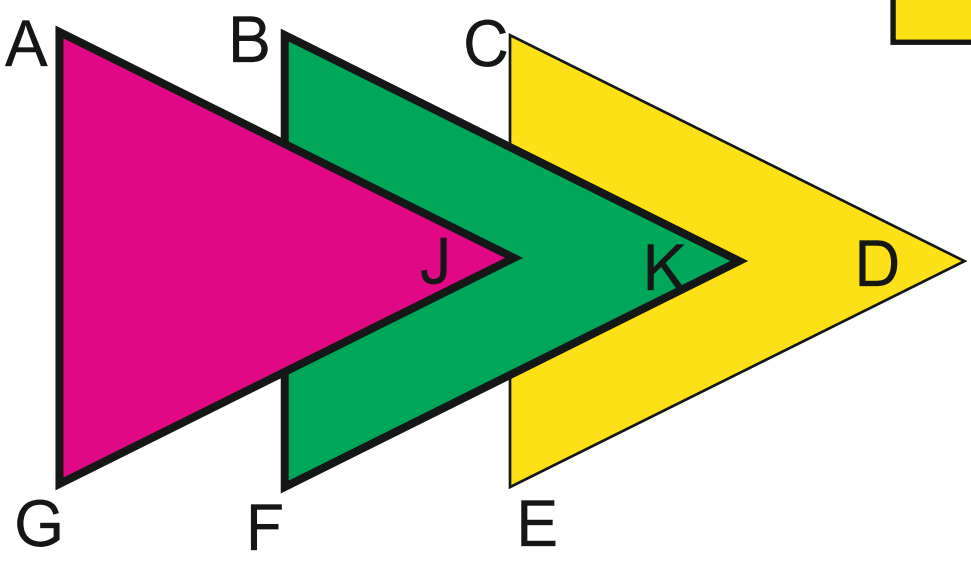
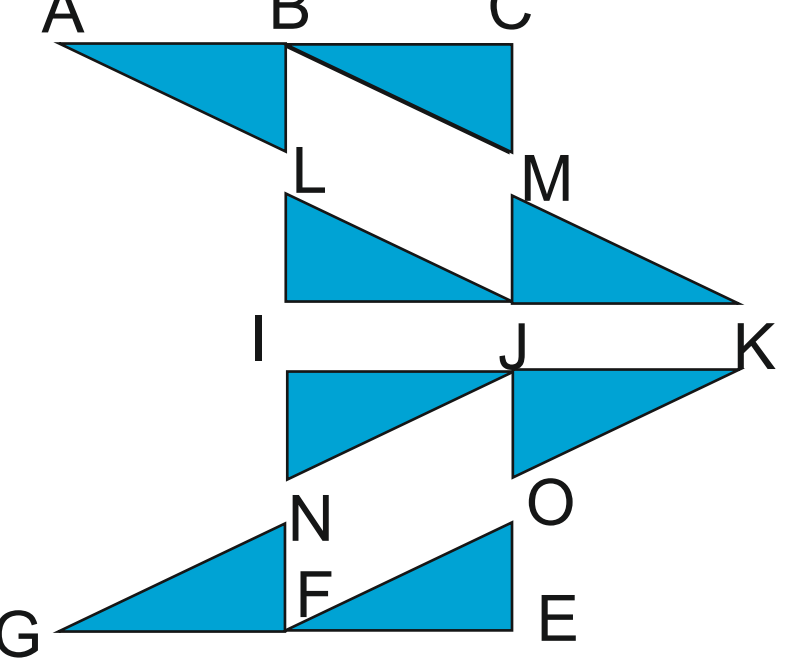
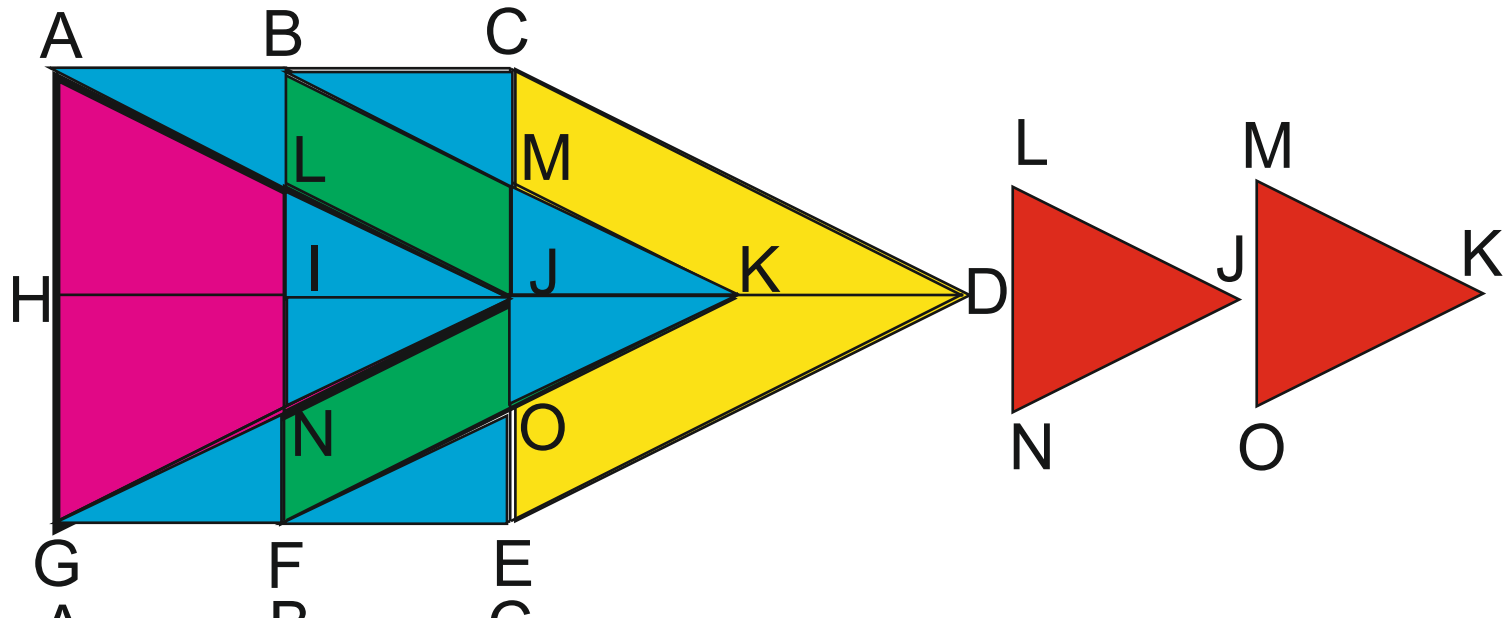
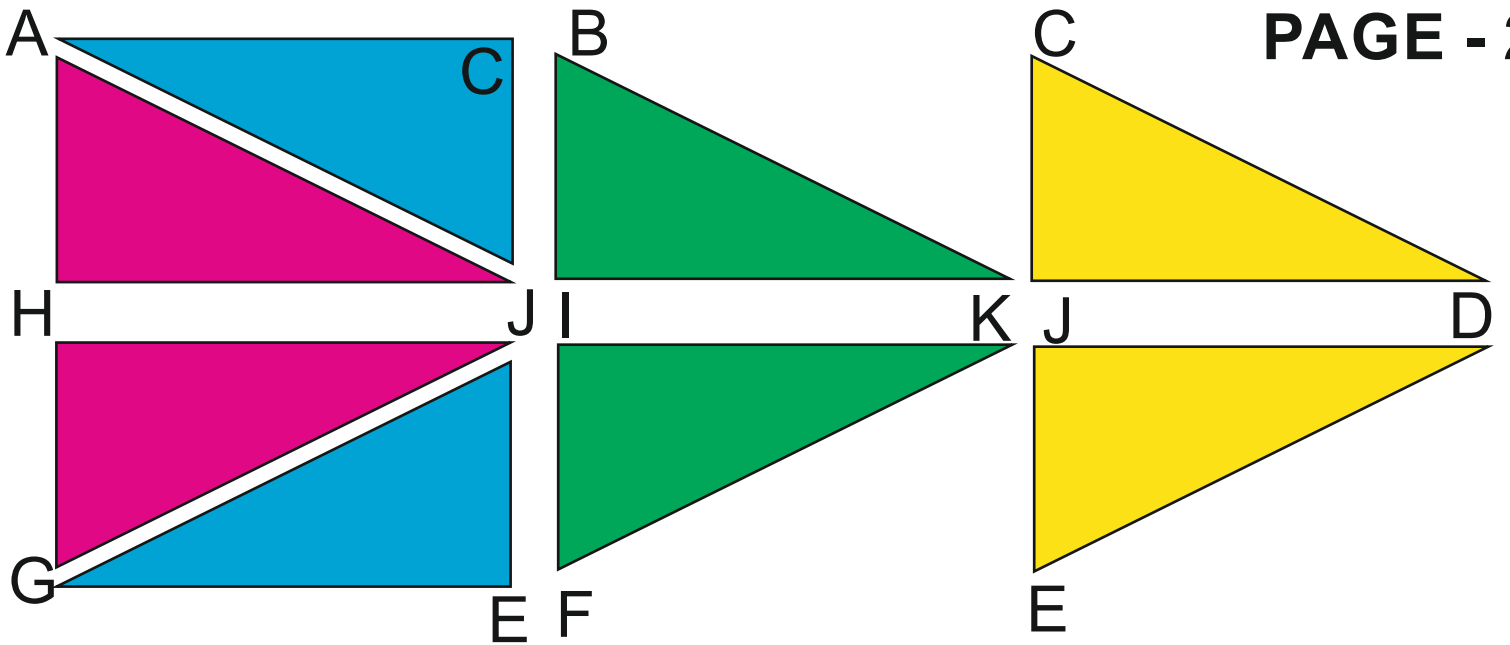
# PAGE - 1

## Question No. 106

In the given figure there are  
21 triangles and  
17 parallelograms.

**The difference between the  
number of triangles and  
the number of parallelograms is four**





**PAGE - 2**

There is one main figure (ABCDEFGHGA).

Total number of triangles in the main figure is shown separately. These triangles can be identified by their symbolic name as well as approximate size, shape and dimensions.

There is one main figure (ABCDEFGHA). Total number of parallelograms in the main figure is shown separately. These parallelograms can be identified by their symbolic name as well as approximate size, shape and dimensions.

